

Please check the examination details below before entering your candidate information

Candidate surname

Other names

Centre Number

Candidate Number

--	--	--	--	--

--	--	--	--

Pearson Edexcel International Advanced Level

Time 2 hours

Paper
reference

WGE03/01

Geography

International Advanced Level

PAPER 3: Contested Planet

You must have:

Resource Booklet (enclosed)

Total Marks

Instructions

- Use **black** ink or ball-point pen.
- **Fill in the boxes** at the top of this page with your name, centre number and candidate number.
- Answer **all** questions in Section A, **ONE** question in Section B and **ONE** question in Section C.
- Answer the questions in the spaces provided
– *there may be more space than you need.*

Information

- The total mark for this paper is 90.
- The marks for **each** question are shown in brackets
– *use this as a guide as to how much time to spend on each question.*
- Calculators may be used.

Advice

- Read each question carefully before you start to answer it.
- Check your answers if you have time at the end.

Turn over ►

P66608A

©2022 Pearson Education Ltd.

Q:1/1/1/1



Pearson

DO NOT WRITE IN THIS AREA

DO NOT WRITE IN THIS AREA

DO NOT WRITE IN THIS AREA

Blank writing area with horizontal dotted lines.

(b) Assess the importance of governance in the successful management of extreme weather hazards such as droughts and tropical cyclones.

(15)

Blank writing area with horizontal dotted lines.



DO NOT WRITE IN THIS AREA

DO NOT WRITE IN THIS AREA

DO NOT WRITE IN THIS AREA

Handwriting practice area with 20 horizontal dotted lines.



DO NOT WRITE IN THIS AREA

DO NOT WRITE IN THIS AREA

DO NOT WRITE IN THIS AREA

(Total for Question 1 = 25 marks)



P 6 6 6 0 8 A 0 5 2 4

DO NOT WRITE IN THIS AREA

DO NOT WRITE IN THIS AREA

DO NOT WRITE IN THIS AREA

(Total for Question 2 = 10 marks)



DO NOT WRITE IN THIS AREA

DO NOT WRITE IN THIS AREA

DO NOT WRITE IN THIS AREA

Handwriting practice area with 25 horizontal dotted lines.

(Total for Question 3 = 15 marks)

TOTAL FOR SECTION A = 50 MARKS



SECTION B

Resource options

Answer ONE question in this section – EITHER Question 4 OR Question 5.

Indicate which question you are answering by marking a cross in the box ☒. If you change your mind, put a line through the box ☒ and then indicate your new question with a cross ☒.

Write your answers in the spaces provided.

If you answer Question 4 put a cross in the box ☒ .

B1: Energy Security

- 4** (a) Using Figure 3, suggest possible reasons for changes to Belgium’s primary energy sources between 1990 and 2020.

(5)

.....

.....

.....

.....

.....

.....

.....

.....

.....

.....

.....

.....

.....

.....

.....

.....

.....

.....

.....

.....

.....

.....

.....

- (b) Using named examples, assess the importance of international energy pathways for the energy security of countries.

(15)

.....

.....

.....

.....

.....

.....

.....

.....

.....

.....

.....

.....

.....

.....

.....

.....

.....

.....

.....

.....

.....

.....

.....

DO NOT WRITE IN THIS AREA

DO NOT WRITE IN THIS AREA

DO NOT WRITE IN THIS AREA



DO NOT WRITE IN THIS AREA

DO NOT WRITE IN THIS AREA

DO NOT WRITE IN THIS AREA

Handwriting practice area with 20 sets of horizontal dotted lines.



P 6 6 6 0 8 A 0 1 1 2 4

DO NOT WRITE IN THIS AREA

DO NOT WRITE IN THIS AREA

DO NOT WRITE IN THIS AREA

(Total for Question 4 = 20 marks)



DO NOT WRITE IN THIS AREA

DO NOT WRITE IN THIS AREA

DO NOT WRITE IN THIS AREA

Handwriting practice area with 20 horizontal dotted lines.



DO NOT WRITE IN THIS AREA

DO NOT WRITE IN THIS AREA

DO NOT WRITE IN THIS AREA

Handwriting practice area with 12 horizontal dotted lines.

(Total for Question 5 = 20 marks)

TOTAL FOR SECTION B = 20 MARKS



P 6 6 6 0 8 A 0 1 5 2 4

DO NOT WRITE IN THIS AREA

DO NOT WRITE IN THIS AREA

DO NOT WRITE IN THIS AREA

Handwriting practice area with 20 horizontal dotted lines.



P 6 6 6 0 8 A 0 1 7 2 4

DO NOT WRITE IN THIS AREA

DO NOT WRITE IN THIS AREA

DO NOT WRITE IN THIS AREA

(Total for Question 6 = 20 marks)



DO NOT WRITE IN THIS AREA

DO NOT WRITE IN THIS AREA

DO NOT WRITE IN THIS AREA

Handwriting practice area with 20 horizontal dotted lines.



DO NOT WRITE IN THIS AREA

DO NOT WRITE IN THIS AREA

DO NOT WRITE IN THIS AREA

Area with horizontal dotted lines for writing.

(Total for Question 7 = 20 marks)

**TOTAL FOR SECTION C = 20 MARKS
TOTAL FOR PAPER = 90 MARKS**



DO NOT WRITE IN THIS AREA

DO NOT WRITE IN THIS AREA

DO NOT WRITE IN THIS AREA

BLANK PAGE



DO NOT WRITE IN THIS AREA

DO NOT WRITE IN THIS AREA

DO NOT WRITE IN THIS AREA

BLANK PAGE



DO NOT WRITE IN THIS AREA

DO NOT WRITE IN THIS AREA

DO NOT WRITE IN THIS AREA

BLANK PAGE



Pearson Edexcel International Advanced Level

Time 2 hours

Paper
reference

WGE03/01

Geography

International Advanced Level

PAPER 3: Contested Planet

Resource Booklet

Do not return this Booklet with the question paper.

Turn over ►

P66608A

©2022 Pearson Education Ltd.

Q:1/1/1/1



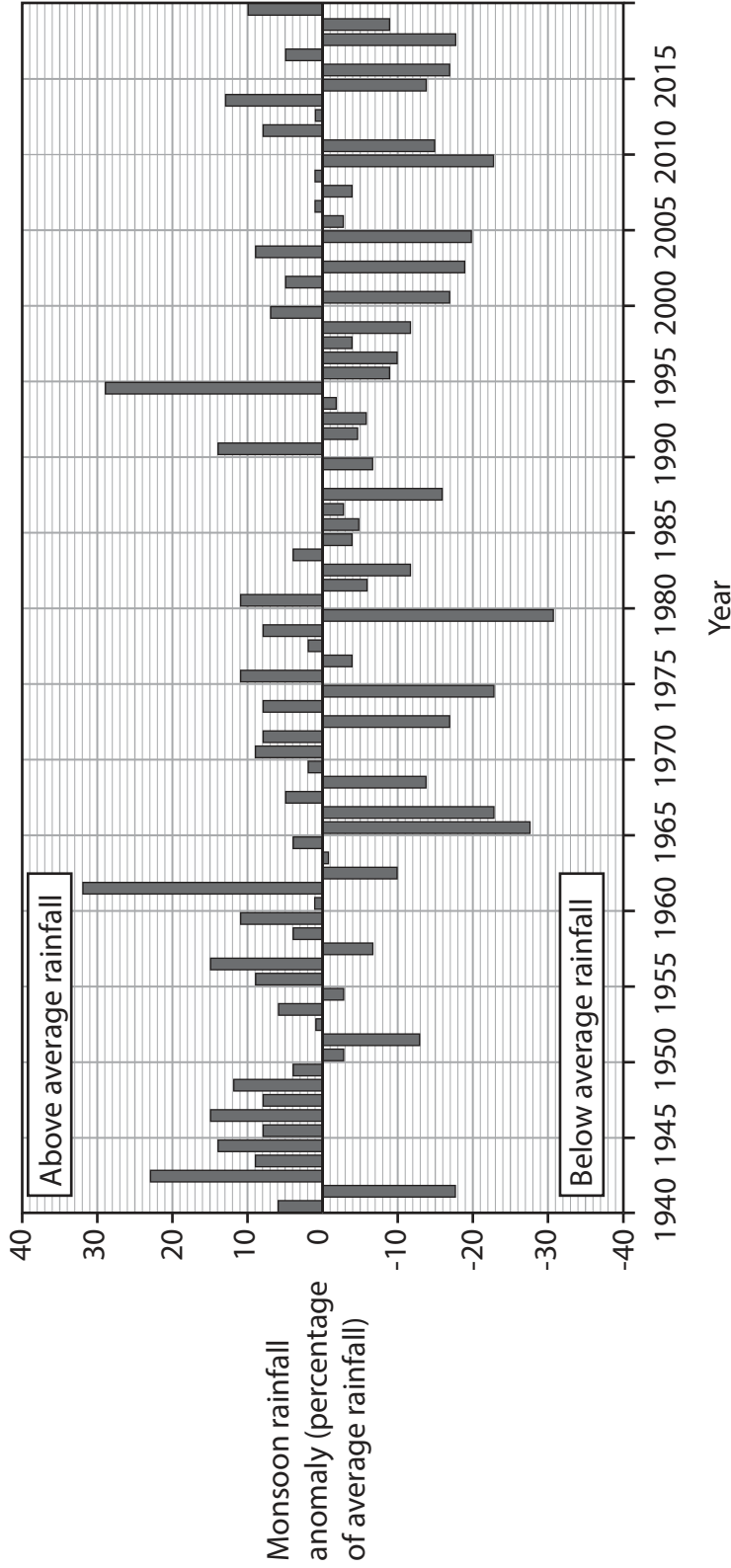
P 6 6 6 0 8 A


Pearson

SECTION A

A1: Atmosphere and Weather Systems

The following resource relates to Question 1 (a).



An anomaly measures variation from the expected average annual rainfall.

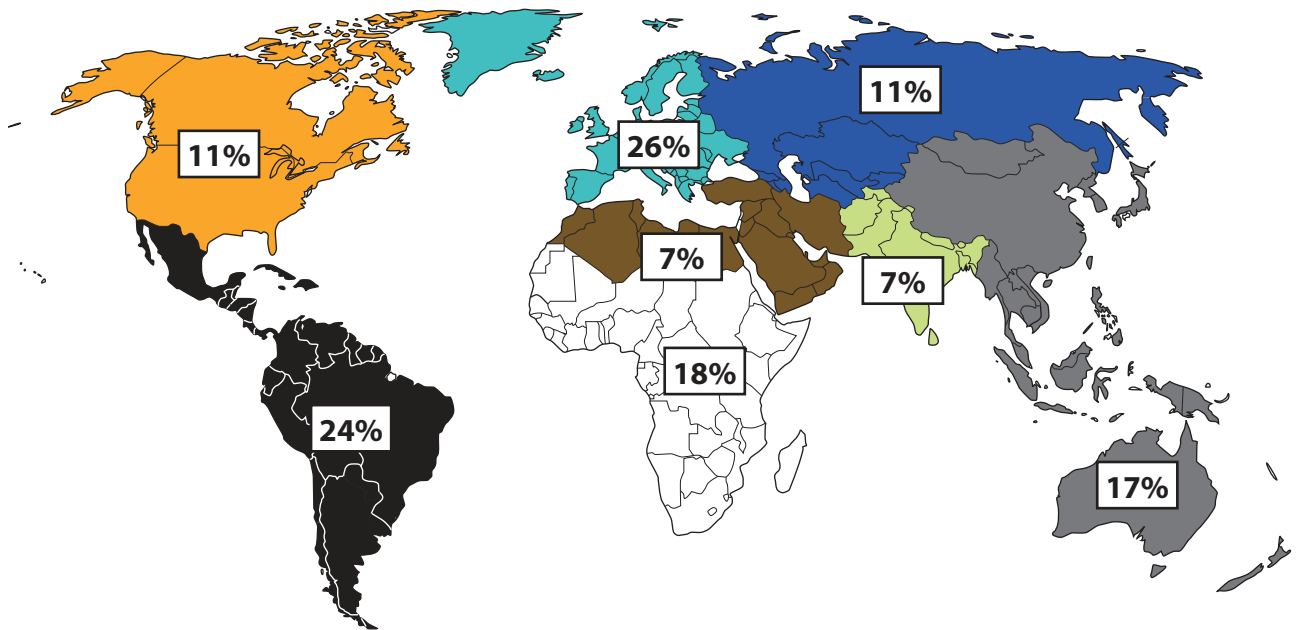
Figure 1

Annual monsoon rainfall anomaly in India 1940 to 2019



A2: Biodiversity Under Threat

The following resource relates to Question 2.



Key



Terrestrial protected areas include national parks, sustainable reserves, biosphere reserves and conservation areas.

Figure 2

Terrestrial protected areas (percentage of total land area) in 2018 by global region

SECTION B

B1: Energy Security

The following resource relates to Question 4 (a).

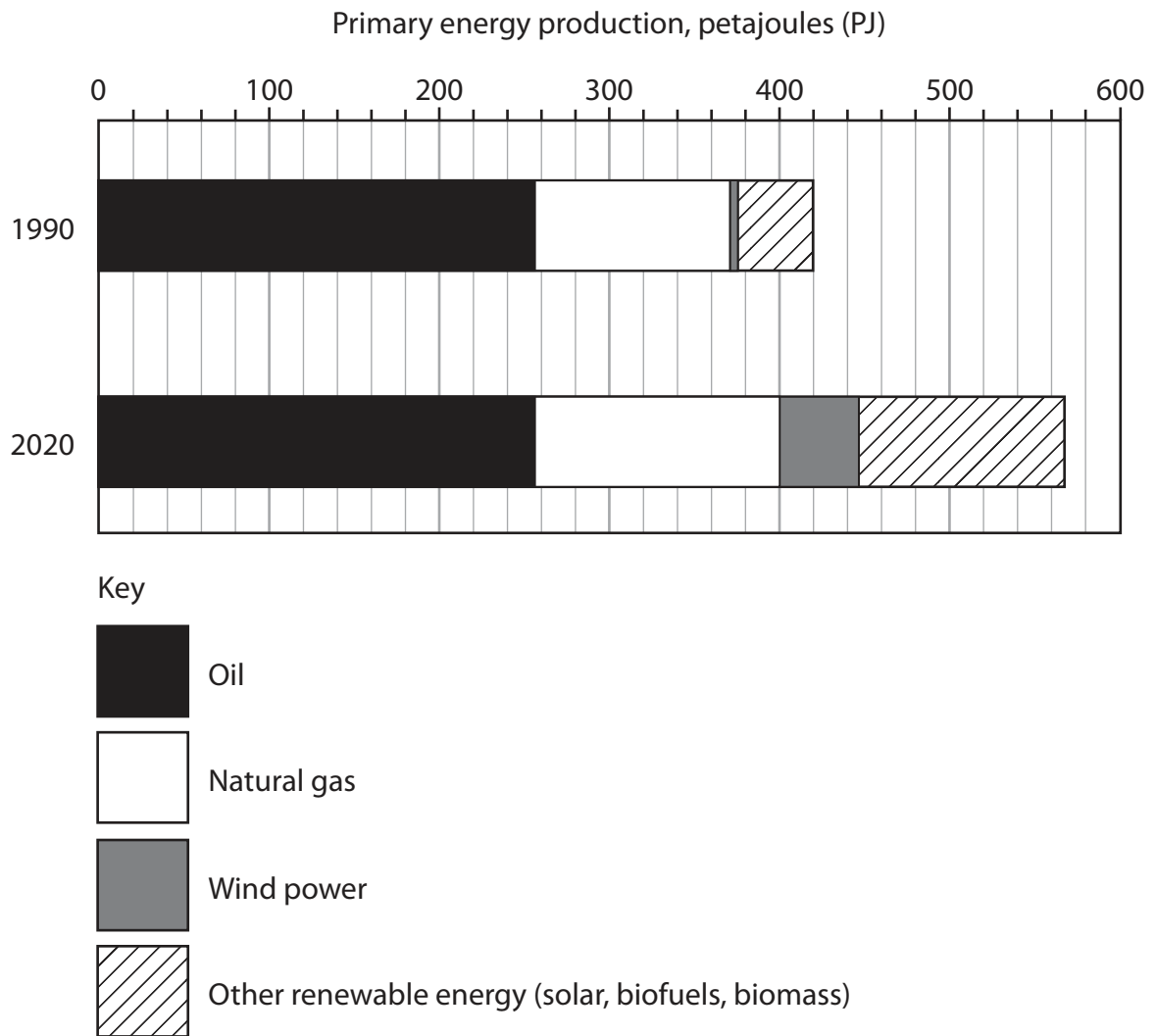


Figure 3

Belgium's primary energy sources in 1990 and 2020

B2: Water Conflicts

The following resource relates to Question 5 (a).

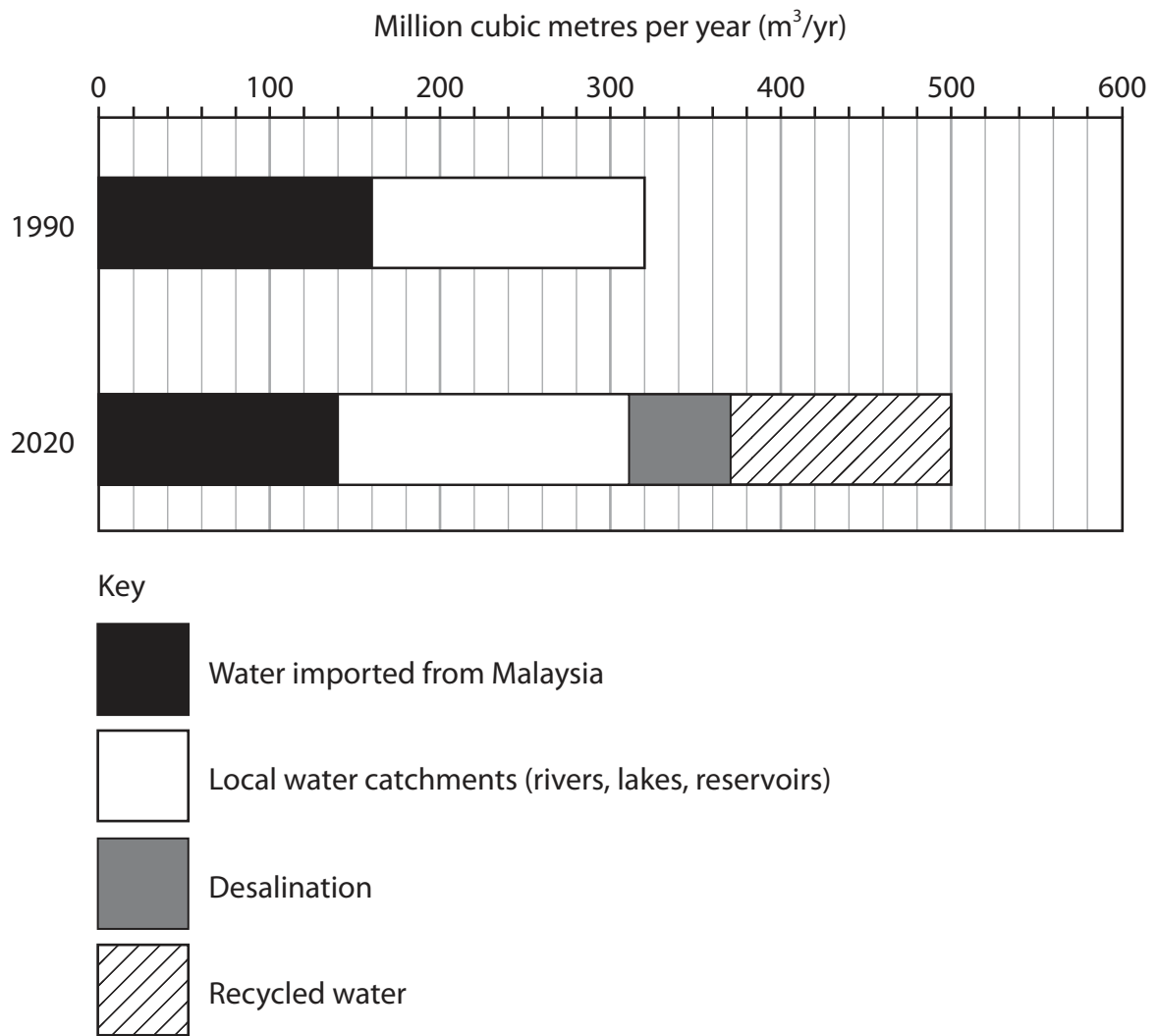


Figure 4

Singapore's water sources in 1990 and 2020

BLANK PAGE



BLANK PAGE



BLANK PAGE

Acknowledgments

Pearson Education Ltd. gratefully acknowledges all following sources used in preparation of this paper:

Figure 1 adapted from: https://mausam.imd.gov.in/ind_latest/contents/cs_anomaly_timeseries_temp_rainfall.php

Figure 2 adapted from: <https://data.worldbank.org/indicator/ER.LND.PTLD.ZS>

Figure 3 adapted from: <https://www.iea.org/countries/belgium>

Figure 4 adapted from: <https://www.pub.gov.sg/>

